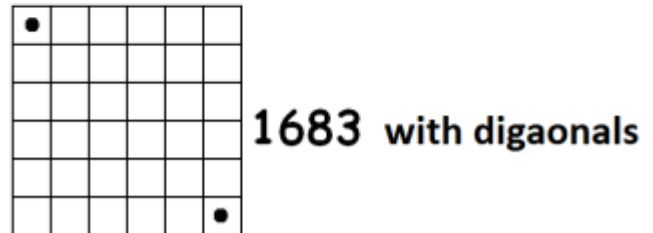
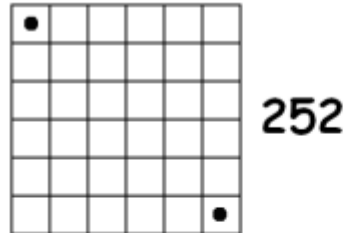
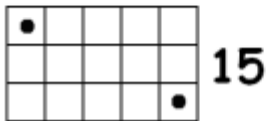
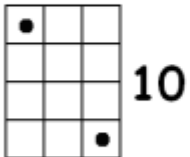
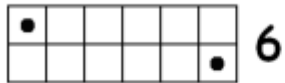
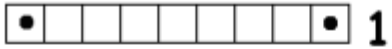


# MORE WITHOUT WORDS

*Mathematical Puzzles to Confound and Delight*



## MWW 33: SOLUTION



To learn how to count paths in grids have a look at lesson 3.1 of [www.gdaymath.com/courses/permutations-and-combinations/](http://www.gdaymath.com/courses/permutations-and-combinations/).